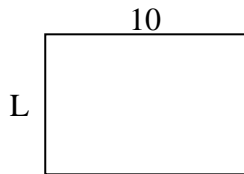




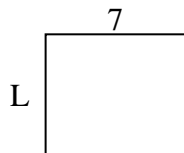
Determine the value of 'L'.

**Answers**

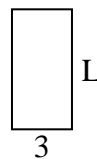
1) Area =  $70u^2$



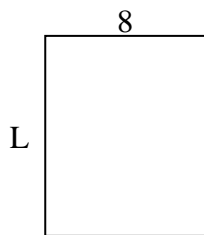
2) Area =  $42u^2$



3) Area =  $18u^2$



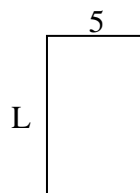
4) Area =  $80u^2$



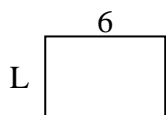
5) Area =  $9u^2$



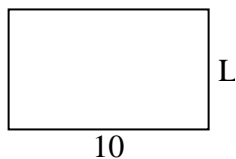
6) Area =  $40u^2$



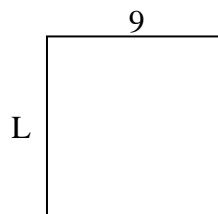
7) Area =  $24u^2$



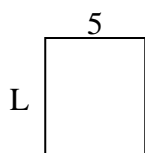
8) Area =  $60u^2$



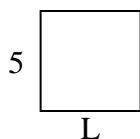
9) Area =  $81u^2$



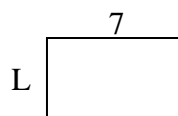
10) Area =  $30u^2$



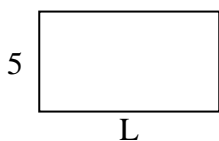
11) Area =  $25u^2$



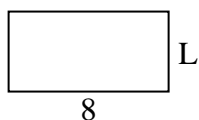
12) Area =  $28u^2$



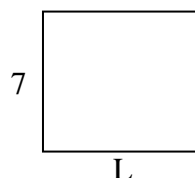
13) Area =  $45u^2$



14) Area =  $32u^2$



15) Area =  $56u^2$

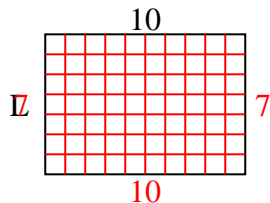


1. \_\_\_\_\_
2. \_\_\_\_\_
3. \_\_\_\_\_
4. \_\_\_\_\_
5. \_\_\_\_\_
6. \_\_\_\_\_
7. \_\_\_\_\_
8. \_\_\_\_\_
9. \_\_\_\_\_
10. \_\_\_\_\_
11. \_\_\_\_\_
12. \_\_\_\_\_
13. \_\_\_\_\_
14. \_\_\_\_\_
15. \_\_\_\_\_

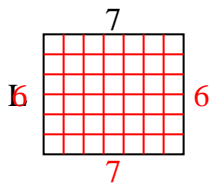


Determine the value of 'L'.

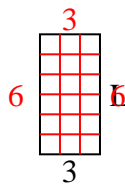
1) Area =  $70u^2$



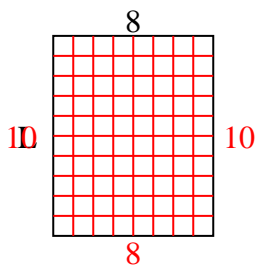
2) Area =  $42u^2$



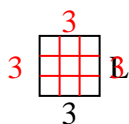
3) Area =  $18u^2$



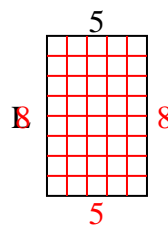
4) Area =  $80u^2$



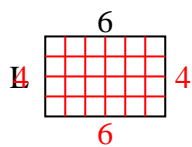
5) Area =  $9u^2$



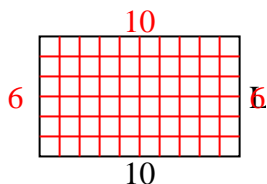
6) Area =  $40u^2$



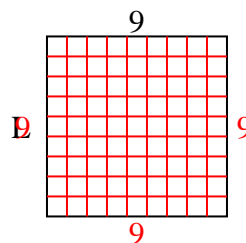
7) Area =  $24u^2$



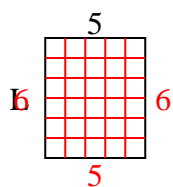
8) Area =  $60u^2$



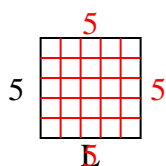
9) Area =  $81u^2$



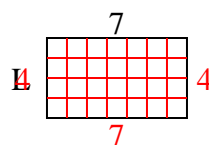
10) Area =  $30u^2$



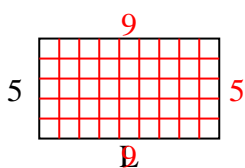
11) Area =  $25u^2$



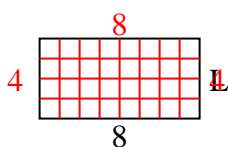
12) Area =  $28u^2$



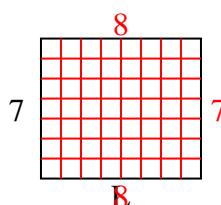
13) Area =  $45u^2$



14) Area =  $32u^2$



15) Area =  $56u^2$



Answers

1. 7

2. 6

3. 6

4. 10

5. 3

6. 8

7. 4

8. 6

9. 9

10. 6

11. 5

12. 4

13. 9

14. 4

15. 8